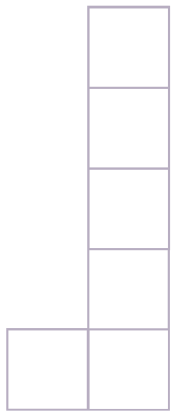
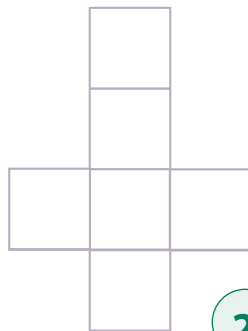


# Picture This

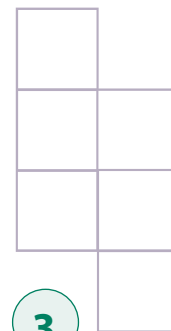
Look at the patterns below. Try to picture which shapes can be folded into a square box that has four sides, a top, and a bottom. Circle the correct answers. **HINT:** Having trouble picturing this in your mind? Use a ruler and a pen to draw the shapes onto heavy paper, cut them out, and see which shapes will actually fold into a box.



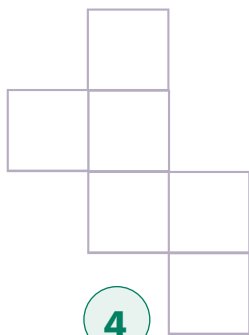
1



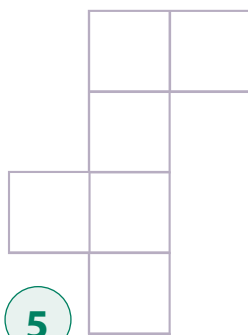
2



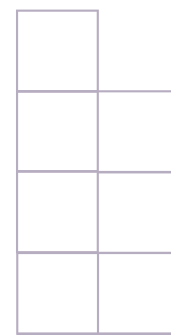
3



4



5



6

Box 1

Yes

No

Box 2

Yes

No

Box 3

Yes

No

Box 4

Yes

No

Box 5

Yes

No

Box 6

Yes

No

# PUZZLE ANSWERS

## Picture This

