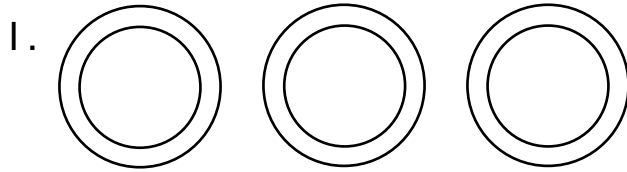


Name \_\_\_\_\_

## Explore Fractions of a Set




Color 1 ring red. Color the rest blue.

What fraction of the rings is red? \_\_\_\_\_

If you covered your eyes, which color ring are you more likely to pick? \_\_\_\_\_

---

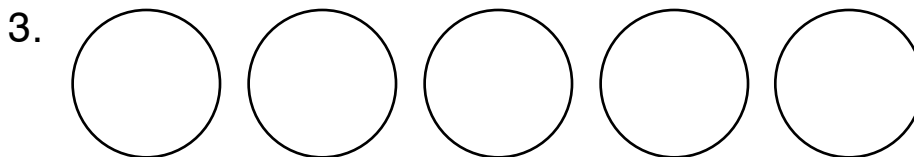


Color 1 banana green. Color the rest yellow.

What fraction of the bananas is green? \_\_\_\_\_

If you covered your eyes, which color banana are you more likely to pick? \_\_\_\_\_

---



Color some balls orange and the rest purple.

What fraction of the balls is orange? \_\_\_\_\_

If you covered your eyes, which color ball are you more likely to pick? \_\_\_\_\_

---

**Notes for Home** Your child identified fractions of sets and predicted which object was more likely to be picked from the set. *Home Activity:* Show your child 5 beans and one piece of macaroni. Ask, if blindfolded, which would he or she be more likely to pick? Why? (a bean)