

Name _____

Problem Solving

3-3

Use Addition


1. How many  and  in all?

Step 1: Write how many of each.


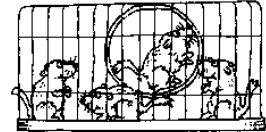
There are 5  and 2 .

Step 2: Write a number sentence.

$$\underline{5} + \underline{2} = \underline{7}$$

Step 3: How many 

and  in all? _____ in all



2. How many  and ?

There are _____  and _____ .

_____ + _____ = _____ in all

3. How many  and ?

There are _____  and _____ .

_____ + _____ = _____ in all

4. How many  and ?

There are _____  and _____ .

_____ + _____ = _____ in all

Using the Page To solve each problem, have children use the pictures at the top of the page to record how many of each animal and then use addition to find each sum. **Notes for Home** Your child read math stories and wrote the number sentences to answer the questions. *Home Activity:* Ask your child to write a number sentence to tell how many fish and gerbils there are in all. (5 + 4 = 9 in all.)