


Name _____

Problem Solving

1-4


Zero

















Every  has , , and .

Some have , too. Others have none.

Which have zero ? Write 0.

Which have ? Write how many.



1.  _____ _____ 	2.  _____ _____ 
3.  _____ _____ 	4.  _____ _____ 
5.  _____ _____ 	6.  _____ _____ 
7.  _____ _____ 	8.  _____ _____ 

9. How many  need ? _____

Notes for Home Your child recognized when to write 0. *Home Activity:* Ask your child what zero means. Then have him or her draw 1, 2, or 3 bananas in each basket with 0 bananas, and write the numeral to show how many.