


Name _____

Date _____ Score _____



Write the numbers.

1. 10 and 6 is _____.


2. 20 and 4 is _____.

3. 50 and 10 is _____.

4. 10 and 40 is _____.

5. Estimate how many.

Circle the number.




about

20

30

40

Read the graph.



6. Who has the most leaves? _____

7. How many more does Leah have than Tina? _____

8. How many more does Todd need to have 30? _____